




# Counting




Name \_\_\_\_\_






Add the numbers shown on the dice! Rewrite it as a number sentence.

   \_\_\_\_\_




$2 + 6 + 3 = \square$

   \_\_\_\_\_

$\square + \square + \square = \square$

   \_\_\_\_\_




$\square + \square + \square = \square$

   \_\_\_\_\_




$\square + \square + \square = \square$

   \_\_\_\_\_

$\square + \square + \square = \square$

   \_\_\_\_\_

$\square + \square + \square = \square$

   \_\_\_\_\_

$\square + \square + \square = \square$

   \_\_\_\_\_




$\square + \square + \square = \square$

# Counting




Name \_\_\_\_\_






Add the numbers shown on the dice! Rewrite it as a number sentence.

   \_\_\_\_\_




$$\square + \square + \square = \square$$

   \_\_\_\_\_




$$\square + \square + \square = \square$$

   \_\_\_\_\_




$$\square + \square + \square = \square$$

   \_\_\_\_\_


$$\square + \square + \square = \square$$

   \_\_\_\_\_




$$\square + \square + \square = \square$$

   \_\_\_\_\_

$$\square + \square + \square = \square$$

   \_\_\_\_\_

$$\square + \square + \square = \square$$

   \_\_\_\_\_




$$\square + \square + \square = \square$$

# Counting




Name \_\_\_\_\_






Add the numbers shown on the dice! Rewrite it as a number sentence.

   \_\_\_\_\_




$$\square + \square + \square = \square$$

   \_\_\_\_\_




$$\square + \square + \square = \square$$

   \_\_\_\_\_

$$\square + \square + \square = \square$$

   \_\_\_\_\_




$$\square + \square + \square = \square$$

   \_\_\_\_\_




$$\square + \square + \square = \square$$

   \_\_\_\_\_

$$\square + \square + \square = \square$$

   \_\_\_\_\_

$$\square + \square + \square = \square$$

   \_\_\_\_\_




$$\square + \square + \square = \square$$

# Counting




Name \_\_\_\_\_






Add the numbers shown on the dice! Rewrite it as a number sentence.

   \_\_\_\_\_




$$\square + \square + \square = \square$$

   \_\_\_\_\_




$$\square + \square + \square = \square$$

   \_\_\_\_\_




$$\square + \square + \square = \square$$

   \_\_\_\_\_




$$\square + \square + \square = \square$$

   \_\_\_\_\_

$$\square + \square + \square = \square$$

   \_\_\_\_\_

$$\square + \square + \square = \square$$

   \_\_\_\_\_

$$\square + \square + \square = \square$$

   \_\_\_\_\_


$$\square + \square + \square = \square$$

# Counting

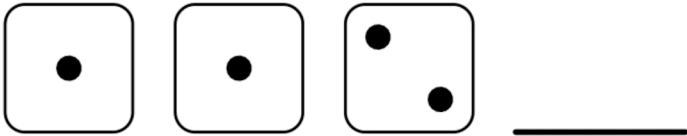
Name \_\_\_\_\_



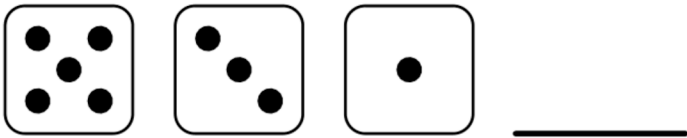
Add the numbers shown on the dice! Rewrite it as a number sentence.




$$\square + \square + \square = \square$$




$$\square + \square + \square = \square$$



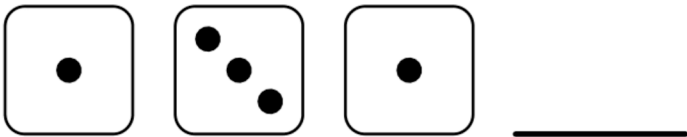
$$\square + \square + \square = \square$$




$$\square + \square + \square = \square$$



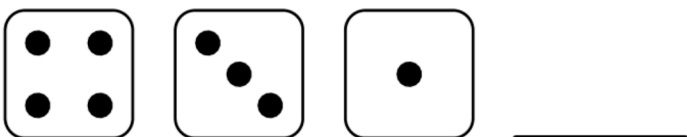
$$\square + \square + \square = \square$$



$$\square + \square + \square = \square$$



$$\square + \square + \square = \square$$



$$\square + \square + \square = \square$$