






Shape Quiz


Date: _____



Name: _____



1. 


A  Square B  Circle



C  Triangle D  Rectangle



2. 


A  Square B  Circle



C  Triangle D  Rectangle



3. 


A  Square B  Circle



C  Triangle D  Rectangle



4. 


A  Square B  Circle



C  Triangle D  Rectangle



5. 


A  Square B  Circle



C  Triangle D  Rectangle



6. 


A  Square B  Circle



C  Triangle D  Rectangle



7. 


A  Square B  Circle



C  Triangle D  Rectangle



8. 


A  Square B  Circle



C  Triangle D  Rectangle



9. 

A  Square B  Circle

C  Triangle D  Rectangle

10. 

A  Square B  Circle

C  Triangle D  Rectangle

11.



A



Square

B



Circle

C



Triangle

D



Rectangle

12.



A



Square

B



Circle

C



Triangle

D



Rectangle

13.



A



Square

B



Circle

C



Triangle

D



Rectangle

14.



A



Square

B



Circle

C



Triangle

D



Rectangle

15.



A



Square

B



Circle

C



Triangle

D



Rectangle

16.



A



Square

B



Circle

C



Triangle

D



Rectangle